



# NALANDA EDUCATIONAL INSTITUTIONS

Vengala Rao Nagar, Moti Nagar, Shiv Bagh - HYDERABAD

Class: I

ANNUAL EXAMINATIONS - 2020

Max. Marks: 50

Subject: English

Time:  $2\frac{1}{2}$ hr

**I. Answer the following questions:**

5 x 2 = 10M

1. What did the doctor come back in the morning for?

A. \_\_\_\_\_

2. Why was mother pleased?

A. \_\_\_\_\_

3. What does the story (who wins the race) teach us?

A. \_\_\_\_\_

4. What did the doctor tell Miss Molly?

A. \_\_\_\_\_

5. Who was Vicky?

A. \_\_\_\_\_

**II. Complete the following poem:**

3M

Ten \_\_\_\_\_

\_\_\_\_\_

\_\_\_\_\_

\_\_\_\_\_ about

**III. Circle the word that does not rhyme:**

2M

1. Hat    bat    mat    but

2. Bed    bad    fed    red

3. Pill    hill    pale    bill

4. Sick    pick    sack    quack

**IV. Choose the correct answer:**

2M

1. David was fond of \_\_\_\_\_ (birds / insects)

2. Mr. Smith was a \_\_\_\_\_ (teacher / student)

3. Miss Molly had a \_\_\_\_\_ (ball / dolly)

4. Hare and Tortoise were good \_\_\_\_\_ (enemies / friends)

**V. Who said these dialogues and to whom:**

2M

1. "Come along to school. \_\_\_\_\_ come and say your tadpoles, to \_\_\_\_\_ sitting in a row.

2. "Come, dinner time I guess" \_\_\_\_\_ to \_\_\_\_\_.

**VI. Write the following young ones:**

5M

1. A bear baby \_\_\_\_\_

2. A deer baby \_\_\_\_\_

3. A goat baby \_\_\_\_\_
4. A sheep baby \_\_\_\_\_
5. A horse baby \_\_\_\_\_

**VII. Join the following sets of sentences using conjunctions:**

**3M**

1. I bought a newspaper. I bought a book

\_\_\_\_\_

2. He is rich. He is unhappy.

\_\_\_\_\_

3. Would you like to walk? Would you like to run?

\_\_\_\_\_

**VIII. Rearrange these letters in order to make words:**

**$2\frac{1}{2}$  M**

1. c k e p o t - \_\_\_\_\_
2. s i e l m p - \_\_\_\_\_
3. n o e y m - \_\_\_\_\_
4. i s e p a - \_\_\_\_\_
5. i n c o - \_\_\_\_\_

**IX. Fill in the blanks with, "and, but (or) or":**

**3M**

1. I speak English \_\_\_\_\_ I don't speak Spanish.
2. You can have rice \_\_\_\_\_ noodles.
3. My father is a doctor \_\_\_\_\_ he works in a hospital.

**X. Number these sentences in the right order to complete the story:**

**$2\frac{1}{2}$  M**

1. \_\_\_\_ The hare slept under a tree.
2. \_\_\_\_ The tortoise won the race.
3. \_\_\_\_ The race began.
4. \_\_\_\_ The tortoise walked slowly on and on.
5. \_\_\_\_ The hare ran a head quickly.

**XI. Complete the story with the words given below:**

**5M**

Fighting	two	bigger	equal	bite
Broke	tiny	biting	cake	monkey

One day two cats found a \_\_\_\_\_. They started \_\_\_\_\_ for the cake. A \_\_\_\_\_ saw the \_\_\_\_\_ cats fighting. He took the cake and \_\_\_\_\_ it into two pieces. He said to the cats. These two parts are not \_\_\_\_\_. This one is than the other.

He took a \_\_\_\_\_ from one piece and then from the other, as if to make them equal. He went on \_\_\_\_\_ from both the pieces until only two \_\_\_\_\_ bits of the cake were left.

**XII. Read the passage and answer the following questions:****5M**

It was a sunny day. A crow sat on the branch of a tree. He had a piece of cheese in his beak. A fox saw the crow. He wanted that piece of cheese. He told the crow that the crow had a very beautiful voice. He asked the crow to sing a song. He felt happy and opened his beak to sing. The cheese fell out of his beak. The clever fox picked up the piece of cheese and ran away.

**Answer the following questions:**

1. Where was the crow sitting?

A. \_\_\_\_\_

2. What did the fox want?

A. \_\_\_\_\_

3. What did the fox tell the crow?

A. \_\_\_\_\_

4. What happened when the crow began to sing?

A. \_\_\_\_\_

5. What did the fox do?

A. \_\_\_\_\_

**XIII. Write a composition on 'a parrot'.****5M**

\*\*\*\*\*



# NALANDA EDUCATIONAL INSTITUTIONS

Vengala Rao Nagar, Moti Nagar, Shiv Bagh - HYDERABAD

Class: I

ANNUAL EXAMINATIONS - 2020

Max. Marks: 50

Subject: EVS

Time:  $2\frac{1}{2}$ hr

**I. Answer the following questions:**

5 x 2 = 10M

1. How did the early man cover his body?

A. \_\_\_\_\_

2. What is the earth made up of?

A. \_\_\_\_\_

3. Name some animals which live on both land and water?

A. \_\_\_\_\_

4. What are trees? Give the examples?

A. \_\_\_\_\_

5. What are mountains?

A. \_\_\_\_\_

**II. Answer the following questions:**

5 x 1 = 5M

1. How many legs do insects have?

A. \_\_\_\_\_

2. What is the model of the earth called?

A. \_\_\_\_\_

3. What does the sun give us?

A. \_\_\_\_\_

4. Where did the early man live?

A. \_\_\_\_\_

5. How did the early man make fire?

A. \_\_\_\_\_

**III. Fill in the blanks:**

5M

1. The flat lands on the earth are called \_\_\_\_\_

2. The leaves are of different \_\_\_\_\_ and \_\_\_\_\_.

3. We see \_\_\_\_\_ and \_\_\_\_\_ in the sky at night.
4. \_\_\_\_\_ are sharp and prick us.
5. The early man built his house with \_\_\_\_\_.

**IV. Name the following:**

**4M**

1. Insects : \_\_\_\_\_, \_\_\_\_\_
2. Early man tools : \_\_\_\_\_, \_\_\_\_\_
3. Things we get from plants : \_\_\_\_\_, \_\_\_\_\_
4. Two domestic animals : \_\_\_\_\_, \_\_\_\_\_

**V. Put  or  for the following:**

**4M**

1. The rainbow has seven colours. (      )
2. Dark clouds bring sunshine (      )
3. The earth is square in shape (      )
4. The roots mostly grow below the ground (      )

**VI. Match the following:**

**5M**

- |                      |          |                       |
|----------------------|----------|-----------------------|
| 1. Pigs              | (      ) | a) small animals      |
| 2. The stars         | (      ) | b) valley             |
| 3. Insects are       | (      ) | c) money plant        |
| 4. Between two hills | (      ) | d) grunt              |
| 5. Climber           | (      ) | e) far from the earth |

**VII. Write animals sound for the following:**

**5M**

1. Elephant - \_\_\_\_\_
2. Monkeys - \_\_\_\_\_
3. Ducks - \_\_\_\_\_
4. Crows - \_\_\_\_\_
5. Birds - \_\_\_\_\_

**VIII. Cross  out the wrong word:**



**4M**

1. The early man ate. (wild berries / pizzas)
2. Dogs sound (mew / bark)
3. The sunrises in the (east / west)

4. We live on the ( moon / earth)

IX. Name the pictures:

4M



X. Draw "the Globe"

4M

\*\*\*\*\*



# NALANDA EDUCATIONAL INSTITUTIONS

Vengala Rao Nagar, Moti Nagar, Shiv Bagh - HYDERABAD

Class: I

ANNUAL EXAMINATIONS - 2020

Max. Marks: 50

Subject: General Knowledge

Time:  $2\frac{1}{2}$ hr

I. Answer the following questions:

5 x 2 = 10M

1. Who wrote our National Anthem?

A. \_\_\_\_\_

2. Name different festivals of India.

A. \_\_\_\_\_

3. Which animal have strong sense of smelling and hearing?

A. \_\_\_\_\_

4. What is a country?

A. \_\_\_\_\_

II. Write the capital city and language of the following countries:

8M

Country name	Capital city	language
1. Japan		
2. Egypt		
3. Germany		
4. China		

III. Fill in the blanks:

4M

1. Our world is called the \_\_\_\_\_

2. Our National song is written by \_\_\_\_\_

3. Many villagers, towns and cities together form a \_\_\_\_\_

4. Green means \_\_\_\_\_ and \_\_\_\_\_

IV. Write who am I:

4M

1. I am the tallest of all animals. I am \_\_\_\_\_

2. I give milk to drink. I am a \_\_\_\_\_

3. I build my nest inside the tree trunk. I am a \_\_\_\_\_

4. I am very intelligent and can jump up to 5 feet high. I am a \_\_\_\_\_

**V. Write antonyms (opposite words) for the following:** 5M

1. Happy x      2. pass x      3. false x      4. cold x      5. laugh x

**VI. Write synonyms (meanings) for the following:** 5M

1. Listen -      2. right -      3. afraid -      4. well known -

5. Tall -

**VII. Match the following:** 5M

- |                       |          |                    |
|-----------------------|----------|--------------------|
| 1. France capital     | (      ) | a) love birds      |
| 2. Many countries     | (      ) | b) lion            |
| 3. King of the Jungle | (      ) | c) peace and truth |
| 4. Symbol of love     | (      ) | d) continents      |
| 5. White means        | (      ) | e) pairs           |

**VIII. Put  or  for the following:** 4M

1. Saffron means religious belief. (      )
2. Birds with their wings. (      )
3. Our National Anthem Vande mataram. (      )
4. Holi is a festival of colours. (      )

**IX. Name the parts of a fish:** 5M

\*\*\*\*\*





# NALANDA EDUCATIONAL INSTITUTIONS

Vengala Rao Nagar, Moti Nagar, Shiv Bagh - HYDERABAD

Class: I

ANNUAL EXAMINATIONS - 2020

Max. Marks: 50

Subject: Mathematics

Time:  $2\frac{1}{2}$ hr

I. Write '6' and '9' table:

5M



II. Write number names for the following:

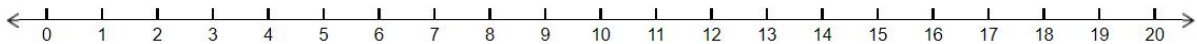
4M

- a) 258 -
- b) 196 -
- c) 300 -
- d) 219 -

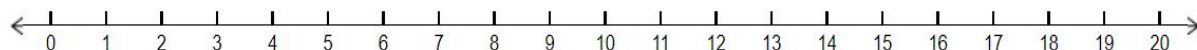
III. Complete the multiplications by skip counting:

2M

a) Multiply:  $4 \times 3 = \underline{\quad}$



b) Multiply:  $2 \times 8 = \underline{\quad}$



IV. Write the numeral for the following:

4M

- a) Two hundred forty one - \_\_\_\_\_
- b) One hundred ninety nine - \_\_\_\_\_
- c) One hundred eighty six - \_\_\_\_\_
- d) Two hundred two - \_\_\_\_\_

V. Complete the multiplication for the following:

4M

a)  $3 \times 8 = \underline{\hspace{2cm}}$       b)  $12 \times 6 = \underline{\hspace{2cm}}$       c)  $8 \times 7 = \underline{\hspace{2cm}}$       d)  $5 \times 9 = \underline{\hspace{2cm}}$

VI. Do the additions for the following:

4M

a) T O	b) T O	c) T O	d) T O
6 4	3 2	1 9	6 9
+ <u>1 7</u>	+ <u>4 5</u>	+ <u>7 0</u>	+ <u>2 8</u>
_____	_____	_____	_____

VII. Do the subtraction for the following:

4M

a) T O	b) T O	c) T O	d) T O
9 4	7 6	5 3	4 2
- <u>3 8</u>	- <u>1 5</u>	- <u>2 7</u>	- <u>4 2</u>
_____	_____	_____	_____

VIII. Write the ascending order: (small to big)

2M

a) 84    53    78    41

\_\_\_\_\_

b) 65    12    97    39

\_\_\_\_\_

IX. Write the descending order( big to small)

2M

a) 14    88    36    55


\_\_\_\_\_

b) 47    29    99    73

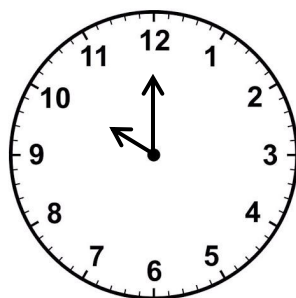
\_\_\_\_\_

X. Write the time:

2M



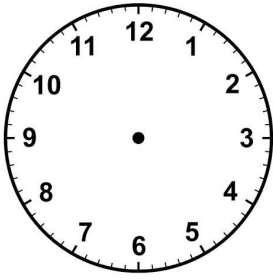
\_\_\_\_\_



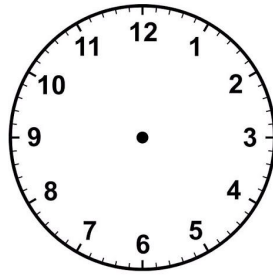
\_\_\_\_\_

XI. Draw both the hands to show the time:

2M



5 0' clock






9 0' clock

XII. Shade every third number for the following:

4M

1	2	3	4	5	6	7	8	9	10
11	12	13	14	15	16	17	18	19	20
21	22	23	24	25	26	27	28	29	30
31	32	33	34	35	36	37	38	39	40
41	42	43	44	45	46	47	48	49	50

XIII. Look at the objects their price tags and answer the following questions: 3M



- a toy train and a pen =
- A book and a chocolate =
- A car and a balloon =

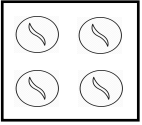
XIV. Match the following:

5M

- |                         |     |                          |
|-------------------------|-----|--------------------------|
| 1. Multiplication means | ( ) | a) 12 months             |
| 2. Rs. 9                | ( ) | b) Rs. 1                 |
| 3. 100 paise            | ( ) | c) repeated addition     |
| 4. Short hand           | ( ) | d) Rs. 2 + Rs. 2 + Rs. 5 |
| 5. A year has           | ( ) | e) hour hand             |

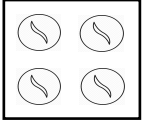
**XV. Find the total number of objects by multiplication:**

**3M**



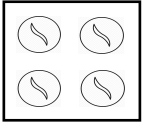
How many marbles are there in each set?

How many sets of marbles are there?



What is the total number of marbles?

$$\square \times \square = \square$$



So total number of marbles =

\*\*\*\*\*