



NALANDA EDUCATIONAL INSTITUTIONS

Vengala Rao Nagar, Moti Nagar, Shiv Bagh - HYDERABAD

Class: II

ANNUAL EXAMINATIONS - 2020

Max. Marks: 50

Subject: English

Time: $2\frac{1}{2}$ hr

I. Answer the following questions:

7 x 2 = 14M

1. Why did he buy a donkey?

A. _____

2. What was the bell tied with?

A. _____

3. Where does the girl go on her brand new bicycle?

A. _____

4. What does he do then the whole day long?

A. _____

5. What did the farmer buy?

A. _____

6. Why did the cat catch hold of the long rope?

A. _____

7. What did the cunning farmer grow in a first year?

A. _____

II. Complete the following poem:

5 x 1 = 5M

My bed _____

_____ and fight!

III. Write a sentence with these words:

5 x 1 = 5M

1. Long: _____

2. Eat: _____

[P.T.O]

3. Sleep: _____
4. Sun: _____
5. Happy: _____

IV. Fill in the blanks with suitable pronouns from the brackets: $6 \times \frac{1}{2} = 3M$

1. Can you help _____ please? (we / us)
2. Look at my new doll. Do you like _____? (they / it)
3. The sun is up. _____ is hot. (he / it)
4. This present is not for you. It is for _____. (her / she)
5. The school bus is very old. _____ broke down yesterday. (he / it)
6. My uncle lives in Chennai. I visited _____ last summer. (he / him)

V. Use the prepositions in the brackets to fill in the blanks: $6 \times \frac{1}{2} = 3M$

1. My father is not _____ home. (near / at)
2. The cat is _____ the table. (under / for)
3. My birthday is _____ December. (on / in)
4. We will arrive _____ Monday from New York. (on / under)
5. Paul is sitting _____ Ruth and Peter. (between / on)
6. Sally lives _____ Oxford street. (above / near)

VI. Join the pairs of sentences using "and" or "but" $5 \times 1 = 5M$

1. I have two brothers. I have one sister.

2. John is thin. His brother is fat.

3. Michael walks to school. Peter comes by car

4. Jackie likes to eat noodles. Jackie likes to eat fish.

5. I went to school yesterday. I wrote a funny story.

VII. Rearrange the words to create questions to match the answers: $5 \times 1 = 5M$

1. Lives who in house that?

_____ My uncle lives in that house.

2. Are from where you?

_____ I am from France.

3. Lunch having we when are?

_____ at half past one.

4. Your school is where?

_____ It is on Park Drive.

5. Doing what you are?

_____ I am baking an apple cake.

VIII. Write suitable synonyms for the following word:

5 x 1 = 5M

1. Start :
2. Little :
3. Powerful :
4. Halt :
5. Ill :

IX. Write a leave letter to your school principal madam asking leave for 4 days. 5M



NALANDA EDUCATIONAL INSTITUTIONS

Vengala Rao Nagar, Moti Nagar, Shiv Bagh - HYDERABAD

Class: II

ANNUAL EXAMINATIONS - 2020

Max. Marks: 50

Subject: EVS

Time: $2\frac{1}{2}$ hr

I. Answer the following questions:

5 x 2 = 10M

1. What do the three hands of a clock tell us?

A. _____

2. What do you like to do in summer?

A. _____

II. Answer the following questions:

4 x 2 = 8M

1. What helps in keeping the air pure and clean?

A. _____

2. What is a valley?

A. _____

3. What common words would you use to direct your friend to locate something?

A. _____

4. What is a season?

A. _____

III. Name the following:

4 x 2 = 8M

1. Two months having 31 days : _____ , _____

2. Two land forms: _____ , _____

3. Two means to get underground water: _____ , _____

4. Two directions: _____ , _____

IV. Fill in the blanks:

5 x 1 = 5M

1. A year has _____ days

2. In the monsoon season the clouds are _____ in the sky.

3. The earth is made up of land _____

4. The _____ flower grows in water.
5. _____ are smaller than mountains.

V. Write the following according to the season:

5M

Sweater, cold drinks, jacket, sunglasses, fan,
raincoat, gumboots, umbrella, ice cream,

Summer	Monsoon	Winter

VI. State True or False:

4 x 1 = 4M

1. Water is very useful to us. []
2. The earth is square in shape []
3. There is no air around the earth []
4. We feel more thirsty in summer []

VII. Match the following:

5 x 1 = 5M

- | | | |
|--------------------|------------------|---------|
| 1. Time | a) 12 months | () |
| 2. New leaves | b) wind | () |
| 3. A year | c) rain | () |
| 4. Moving air | d) spring season | () |
| 5. Source of water | e) clock | () |

VIII. Draw the pictures neatly:

5M

1. Clock
2. Three things which work due to air.



NALANDA EDUCATIONAL INSTITUTIONS

Vengala Rao Nagar, Moti Nagar, Shiv Bagh - HYDERABAD

Class: II ANNUAL EXAMINATIONS - 2020 Max. Marks: 50

Subject: General Knowledge Time: 2½hr

I. Answer the following questions: [5 x 3 = 15M]

1. What do we watch on stage theatre?

A. _____

2. Why do we go to the exhibition?

A. _____

3. What is a refrigerator?

A. _____

4. What is the full form of CPU?

A. _____

5. How many teams are there in cricket?

A. _____

II. Name the following: [5 x 2 = 10M]

1. 2 underground stems: _____, _____

2. 2 leafy vegetables: _____, _____

3. 2 root food: _____, _____

4. 2 outdoor games: _____, _____

5. 2 items cooked in the oven: _____, _____

III. Fill in the blanks: [5 x 1 = 5M]

1. The refrigerator works on _____.

2. _____ is the brain of the computer.

3. Mobiles are used for _____ purpose.
4. An over contains _____ balls.
5. To play games like table tennis, carrom, chess we require _____ players.

IV. Write the synonyms of the following: [5 x 1 = 5M]

1. Wash - _____
2. Tell - _____
3. Similar - _____
4. Collect - _____
5. Pick - _____


V. Rearrange the jumbled words: [5 x 1 = 5M]

1. EDR ORTF - _____
2. AJT HAALM - _____
3. YRAMDIPS - _____
4. ARPK - _____
5. BACEH - _____

VI. Recognize the various parts of the vegetables given below: [5 x 1 = 5M]


1. Pomegranate - _____
2. Beet root - _____
3. Wheat - _____
4. Ginger - _____
5. Spinach - _____

VII. Name the pictures: [5 x 1 = 5M]

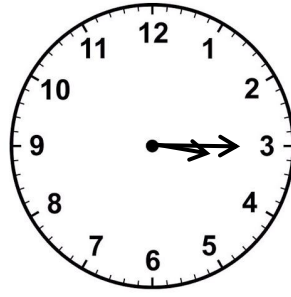


V. Write the time in hours and minutes:

2M



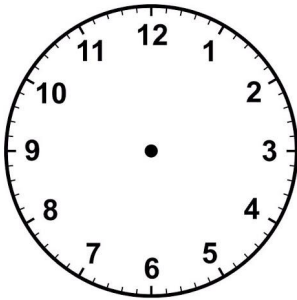
___ hours ___ minutes



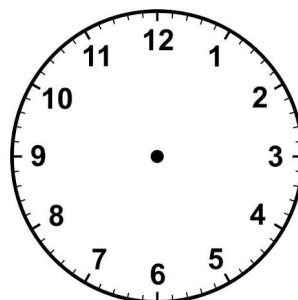
___ hours ___ minutes

VI. Draw the hours and minutes hands in the clock:

2M



1 : 20



6 : 50

VII. Word problem:

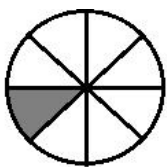
5M


1. The length of a table is 5 hand spans. How many hand spans is the total length of 2 such tables?

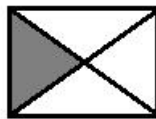
Sol: _____


VIII. Write the fraction indicated by coloured portion:

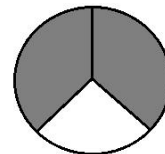
5M











IX. Draw the following shapes:

5 x 1 = 5M

1. Cone




2. cube

3. segment

4. Triangle




5. angle

X. Look at the currency notes and the coins. Find out total amount: $6 \times \frac{1}{2} = 3M$



1.  +  +  =

2.  +  +  =

3.  +  +  =

4.  +  +  =

5.  +  +  =

6.  +  =

XI. Complete the following table:

5M

Name of the month	Which month of the year?	How many days?
October		
March		
June		
February		
August		

XII. Fill in the blanks:

3 x 1 = 3M

1. _____ is the part of the whole.
2. The shape of the pencil box is _____
3. 1 hour = _____ minutes
