

Name

Section

Roll No.



NALANDA EDUCATIONAL INSTITUTIONS

Vengala Rao Nagar, Moti Nagar, Shiv Bagh - HYDERABAD

Class: LKG

ANNUAL EXAMINATIONS

Max. Marks: 50

Date:

English Oral

Time: 2½ hr

I. Spell the 'o' and 'u' sound words

[10 Marks]

Pot dot hot log box

Sun gun bun hut nut

II. Spell the words from [apple - zip]

[26 Marks]

X-mas tree, net, hat, ice, egg, umbrella,

dog, pen, queen, tree, apple, watch, spoon.

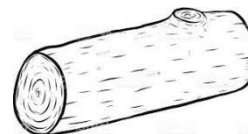
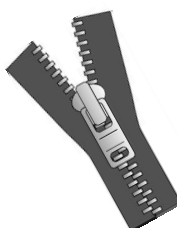
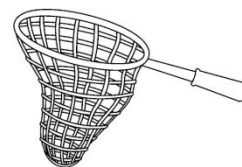
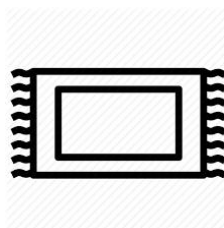
III. Identify the following alphabet

[10 Marks]

H, d, B, X, y, W, q, g, M, n

IV. Picture Reading:

[4 Marks]



IV. Match capital to small letters:

[2M]

Q

y

Y

h

H

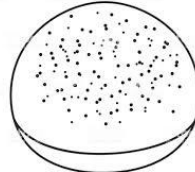
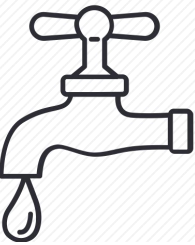


t

T

q

V. Name the pictures:


[10M]



VI. Match the word to picture:

[2M]

Umbrella



Fish




Lamp



Mango



VII. Identify and encircle the capital letters from the given picture: [5M]



Name	
------	--

Section	
---------	--

Roll No.	
----------	--



NALANDA EDUCATIONAL INSTITUTIONS

Vengala Rao Nagar, Moti Nagar, Shiv Bagh - HYDERABAD

Class: LKG

ANNUAL EXAMINATIONS

Max. Marks: 50

Date:

General Knowledge Oral

Time: 2 $\frac{1}{2}$ hr

I. Answer the following questions:

[20M]

1. Name three festivals.
2. Who looks after the patient?
3. Which festival is called the festival of lights?
4. Where do Hindus pray?
5. Who stitches our clothes?
6. When do we celebrate Christmas?
7. Who catches the thieves?
8. Who gives us medicines?
9. Who grows the crops?
10. Who brings us letters?

II. Story telling:

[30M]

1. The Lion and the Mouse

[or]

2. The Fox and the Grapes.

Name	
------	--

Section	
---------	--

Roll No.	
----------	--



NALANDA EDUCATIONAL INSTITUTIONS

Vengala Rao Nagar, Moti Nagar, Shiv Bagh - HYDERABAD

Class: LKG

ANNUAL EXAMINATIONS

Max. Marks: 50

Date:

Math Oral

Time: $2\frac{1}{2}$ hr

I. Spell the Number names [one - ten]: [10M]

II. Say numbers in oral [71 - 100]: [15M]

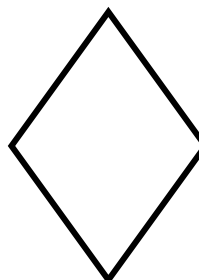



III. Say count by 10's [10 - 100]: [5M]

IV. Say Backward numbers [10 - 9]: [5M]

V. Identify the following numbers: [10M]

24	63	95	88	40
57	75	100	22	36

VI. Identify the following shapes: [5M]



Name	
------	--

Section	
---------	--

Roll No.	
----------	--



NALANDA EDUCATIONAL INSTITUTIONS

Vengala Rao Nagar, Moti Nagar, Shiv Bagh - HYDERABAD

Class: LKG

ANNUAL EXAMINATIONS

Max. Marks: 50

Date:

Math Written

Time: 2½ hr

I. Write numbers from [51 - 100]

[12½M]

II. Count the object and write the number:

[3M]









III. Draw counters:

[2½M]

8 - _____

10 - _____

3 - _____

9 - _____

5 - _____

IV. Write missing numbers:

[2½M]

29		31		
----	--	----	--	--

58		60		62
----	--	----	--	----

V. Write number names [1 - 10]

[10M]

10 - _____

8 - _____

7 - _____

3 - _____

5 - _____

2 - _____

9 - _____

4 - _____

6 - _____

1 - _____

VI. Write after and between numbers:

[5M]

69	
----	--

54		56
----	--	----


74	
----	--

89		91
----	--	----

99	
----	--

VII. Count and circle the correct number


[5M]



7	8	9
---	---	---



5	4	6
---	---	---



XI. Backward No's**[2 $\frac{1}{2}$ M]**

Name	
------	--

Section	
---------	--

Roll No.	
----------	--



NALANDA EDUCATIONAL INSTITUTIONS

Vengala Rao Nagar, Moti Nagar, Shiv Bagh - HYDERABAD

Class: LKG

ANNUAL EXAMINATIONS

Max. Marks: 50

Date:

Rhymes Oral

Time: 2½ hr

I. Recite any five of the following rhymes with proper rhyme

5 x 10 = 50M

1. Round - n - Round the garden
2. Jam special
3. Engine Engine number 9
4. Rainbow
5. Chop-chop chopping chop
6. Thank you God
7. Hickory Dickory dock
8. Yankee Doodle
